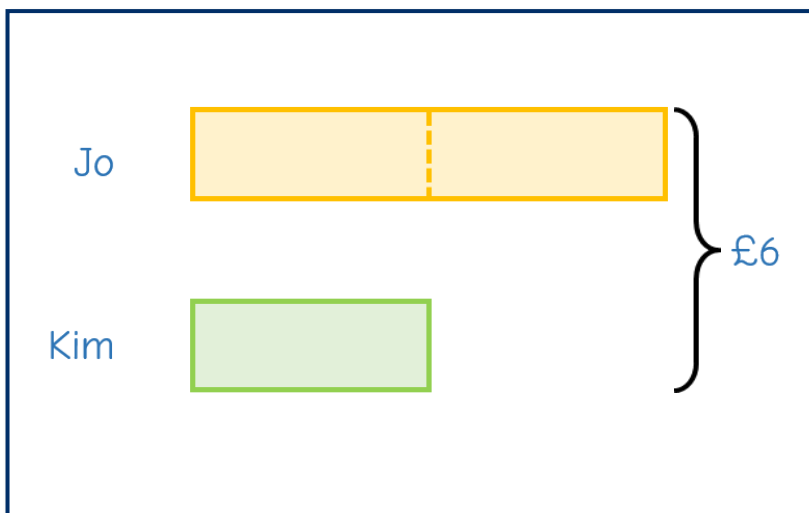


1 Jo and Kim have £6 altogether.




Jo has double the amount of money that Kim has.

How much money does Jo have?

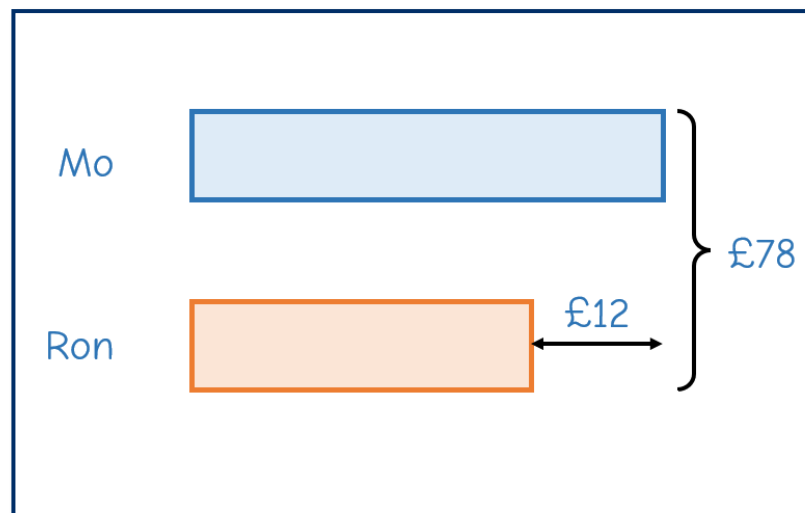


2 Mo and Ron have £78 in total.

Ron has £12 less than Mo.



How much money does Mo have?



- 3** Dora puts £4.50 into her piggy bank every day to buy a gift.



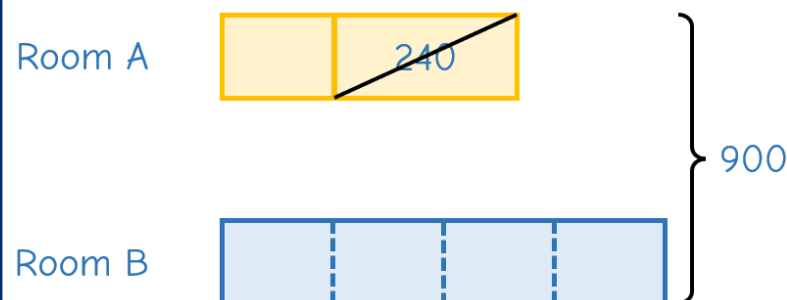
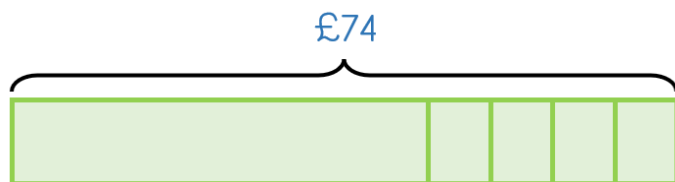
After 4 days, she has £74 in total.

How much money did Dora have at the start?

- 4** A factory makes rolls of wrapping paper and stores them in room A and room B.

- The factory makes 900 rolls of wrapping paper.
- 240 rolls are moved from room A to room B.
- Room B now has 4 times as many rolls as room A.

How many rolls of wrapping paper were in room A at the start?



5

Four bags of grit and six bags of firewood weigh 276 kg in total.

Two bags of grit weigh 12 kg more than one bag of firewood.

What is the combined weight of one bag of grit and one bag of firewood?

The Daily Challenge