



1 Kim and Dora each have £16

Kim gives Dora £4



How much more money does Dora have than Kim now?




2 Sam has a box of chocolates.

She eats half of the box of chocolates.

Mo eats half of the remaining chocolates.



What fraction of the box of chocolates are left?



- 3** In a shop, a gift bag costs  $\frac{1}{3}$  of the price of a snowflake decoration.

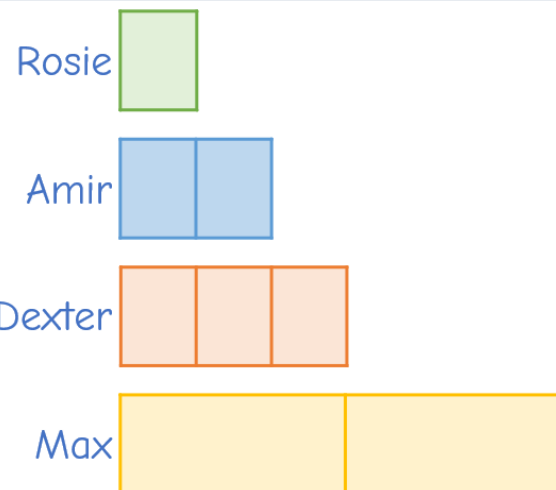
The cost of 3 snowflake decorations and 1 gift bag is £9.00



How much does a snowflake decoration cost?

- 4** Rosie, Amir, Dexter and Max raise money to buy winter coats for charity.
- Amir raises twice as much as Rosie.
  - Dexter raises three times as much as Rosie.
  - Max raises twice as much as Dexter.
  - They raise £1,140 in total.

How much more money does Max raise than Rosie?



5

Tommy, Eva and Whitney share £224 to buy winter decorations.

- Tommy spends 25% of his money.
- Eva spends  $\frac{3}{5}$  of her money.
- Whitney spends  $\frac{1}{3}$  of her money.
- They each have the same amount of money remaining.

How much did they spend in total?

## The Daily Challenge