

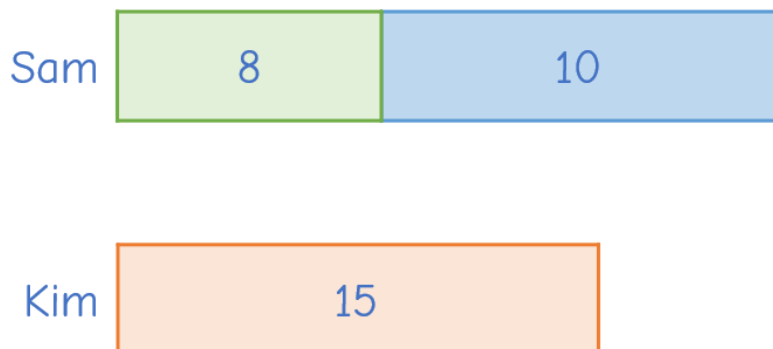
1 Sam has 8 mince pies.

Sam buys 10 more mince pies.

Kim has 15 mince pies.



How many more mince pies does Sam have than Kim?



2 15 marshmallows are shared equally between three mugs of hot chocolate.



How many marshmallows are there in two mugs of hot chocolate?

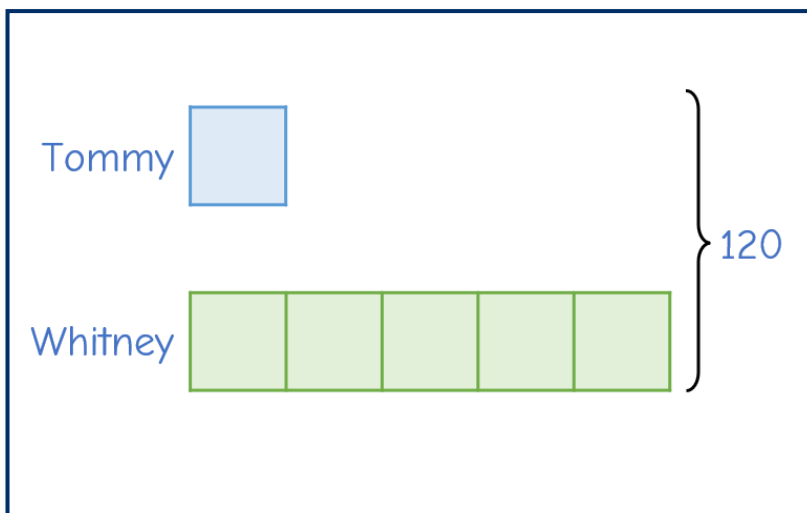


3

Whitney and Tommy are collecting gifts for charity.

- Together, they have collected 120 gifts.
- Whitney has 5 times as many gifts as Tommy.
- Whitney gives some gifts to Tommy.
- They now have the same number of gifts.

How many gifts did Whitney give to Tommy?



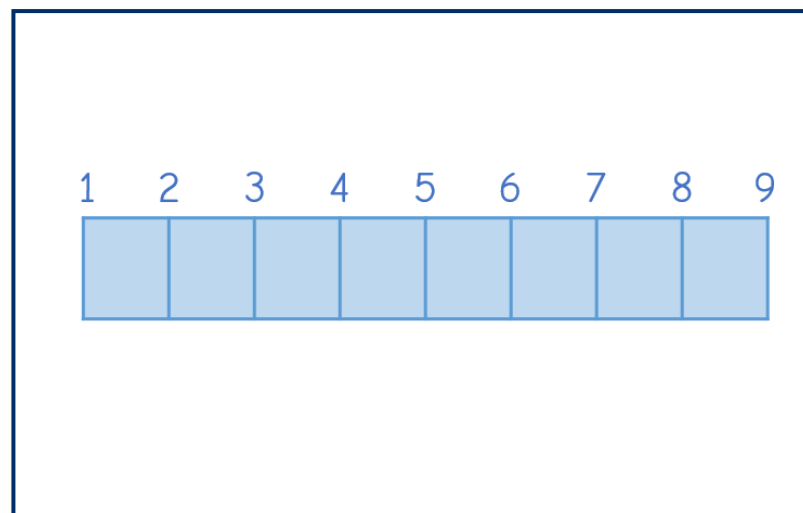
4

Jack builds 9 snowmen, evenly spaced in a straight line.

The distance between the 3rd and 7th snowman is 18 m.



What is the total distance between the 1st and 9th snowman?



5

A shop sells hot chocolate packets in three sizes: small, medium, and large.

- The shop has twice as many large packets as medium packets.
- The ratio of small packets to medium packets is 5 : 1
- The shop sells 50% of the small packets, 25% of the large packets, and none of the medium packets.
- The shop has 370 packets remaining.

How many small, medium, and large packets were there at the start?

The Daily Challenge

