


1

Mo writes 5 cards.
He gives some out.
He has 2 cards left.



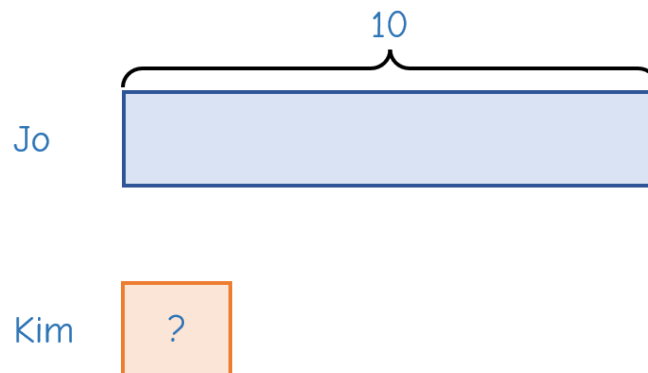
How many did he give out?



2

Jo has 10 chocolate coins.
She gives 4 to Kim.
They now have the same number of chocolate coins.

How many chocolate coins did Kim have at the start?

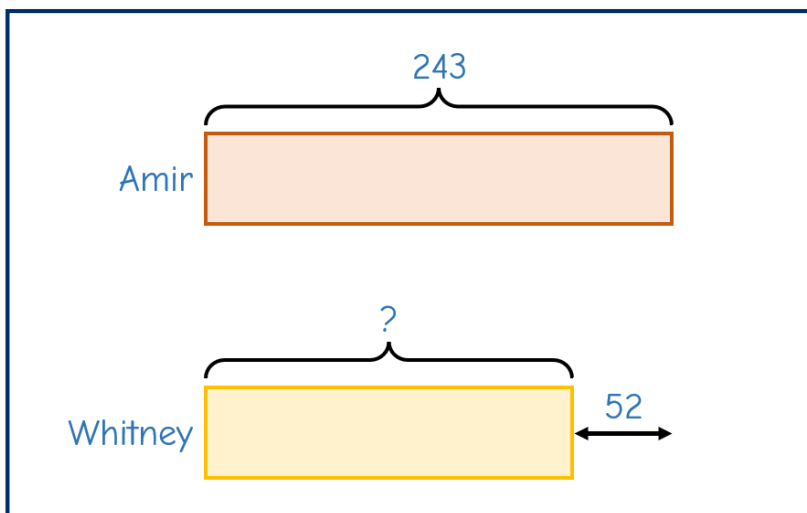


- 3** Amir puts 243 decorations on his Christmas tree.

Whitney puts 52 fewer decorations on her tree than Amir did.

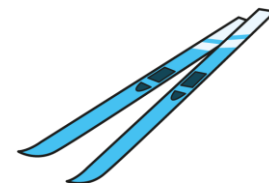


How many decorations did they use in total?

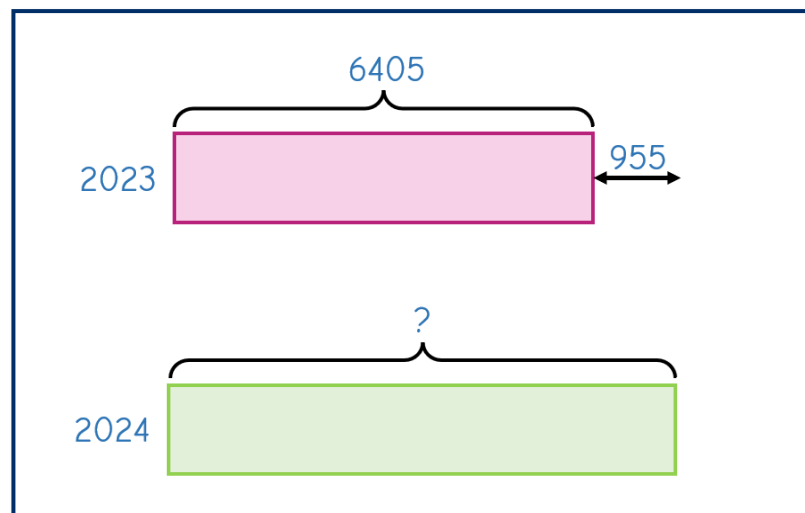


- 4** 6,405 people visited a ski resort in 2023
955 more people visited the same ski resort in 2024

10% of the visitors in 2024 hired skis.



How many people hired skis in 2024?



5

A tree has 480 red and green baubles on it.

$\frac{2}{5}$ of the baubles are red.

More red baubles are added to the tree.

$\frac{7}{13}$ of the baubles are now red.

How many red baubles were added to the tree?

The Daily Challenge