



Back to School Subtraction up to 10




$$- 3 =$$

7



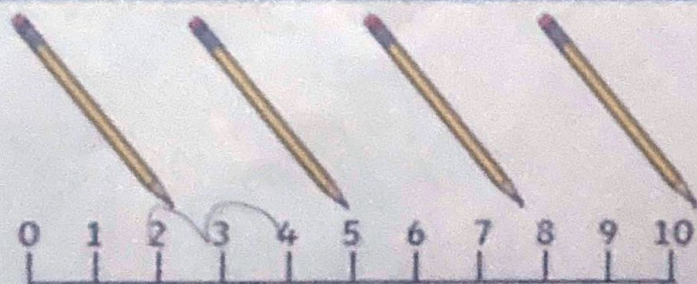
$$- 5 =$$

5




$$- 5 =$$

5



$$- 2 =$$

8



$$- 3 =$$

7

Questions

1. How many seasons are in one year? Tick one.

- ☐ three
- ☒ four
- ☐ five

2. What is the weather like in winter? Tick one.

- ☒ It is cold.
- ☐ It is warm.
- ☐ It is sunny.

3. Which animals hibernate? Tick one.

- ☐ dogs
- ☒ frogs
- ☐ trees

4. Some animals do not hibernate. What do they do? Tick one.

- ☐ Some birds fly away to colder countries.
- ☒ Some frogs fly away to warmer countries.
- ☐ Some birds fly away to warmer countries.

5. Which months are winter in Australia? Tick **two**.

- ☐ December
- ☒ June
- ☒ August

'ear' Spelling Activity

1. Trace over 'ear'.

ear ear ear ear ear
ear ear ear ear ear

2. Just add 'ear'.

ear

hear

gear

beard

feet

year

3. Write the correct 'ear' words under the pictures.



fear



hear



ear



beard




year



gear

Zoom to the Moon

- 10 I am in a rush to get to the Moon.
16 I zoom up into the night.
21 The stars are my light.
29 My ship hits the rock with a thud.
37 I hop down and look near and far.
44 It is too dark on the Moon.
50 I zoom back to my bed.



Read Together Quick Questions



1. What does the author see on the way to the way to the Moon? Tick one.

- ☐ planets
☒ stars
☒ rockets



2. Where does the text end? Tick one.

- ☐ on the Moon
☒ in bed
☐ in the rocket ship



3. Which word describes the way the ship hits the Moon? Tick one.

- ☐ bang
☐ bash
☒ thud



4. Do you think that the author liked being on the Moon?

Yes

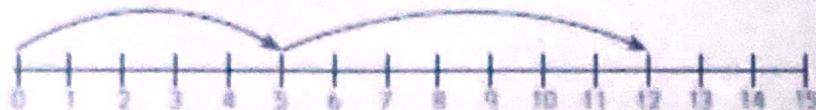


Addition to 20 on a Number Line - Sheet 3


For these questions, can you work out which sums are being shown on the number lines?

The first one has been done for you.


1. $5 + 7 = 12$



2. $6 + 4 = 10$




3. $8 + 3 = 11$




4. $7 + 6 = 13$



5. $4 + 8 = 12$



6. $9 + 3 = 12$



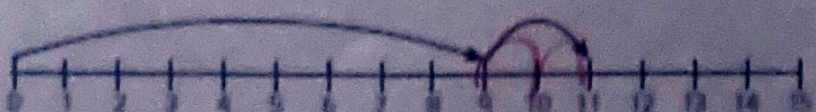
7. $8 + 6 = 14$



8. $5 + 6 = 11$



9. $9 + 2 = 11$



10. $8 + 7 = 15$



Questions

1. Which season is the coldest of the year? Tick one.

- ☐ spring
☐ autumn
☒ winter

2. What happens if the temperature drops below freezing? Tick one.

- ☐ There might be puddles.
☒ There might be snow or ice.
☐ There might be four seasons.

3. Draw two lines and match each animal to how far they migrate.



4. Look at the **Nature in Winter** section.

Find and copy a word which describes the plants that keep their leaves in winter.

evergreen

5. Where do swifts go to when they migrate?

Africa

Describe the Monster



Choose the words and phrases that describe the monster.

hairy

scaly

fluffy

orange

blue

green

big

enormous

small

tiny

scary

kind

lonely

crusty toes

stripy nose

pointy tusks

long horns

spotty tail

purple claws

long neck

yellow tummy

Write some sentences to describe the monster.

Jack is a hairy
monster. He is
enormous and
friendly.
I like him. He is kind.
He has large eyes.

Year 1 Everyday Materials

First, match up the objects to their materials by drawing lines between the images and labels.

Next, tick the **hard** objects with a **blue** pencil and the **soft** objects with a **red** pencil.



glass	metal	plastic	fabric	brick	wood	marble
-------	-------	---------	--------	-------	------	--------

On the lines, write a different object made from each of the materials.

metal bucket wood house plastic LEGO

Patterns - Count in 5s

Can you complete the patterns below?

5	10	15	20	25	30	35	40	45	50
---	----	----	----	----	----	----	----	----	----

35	40	45	50	55	60	65	70	75	80
----	----	----	----	----	----	----	----	----	----

25	30	35	40	45	50	55	60	65	70
----	----	----	----	----	----	----	----	----	----

60	65	70	75	80	85	90			
----	----	----	----	----	----	----	--	--	--