

- 1** Mrs Smith eats 5 mince pies a week.



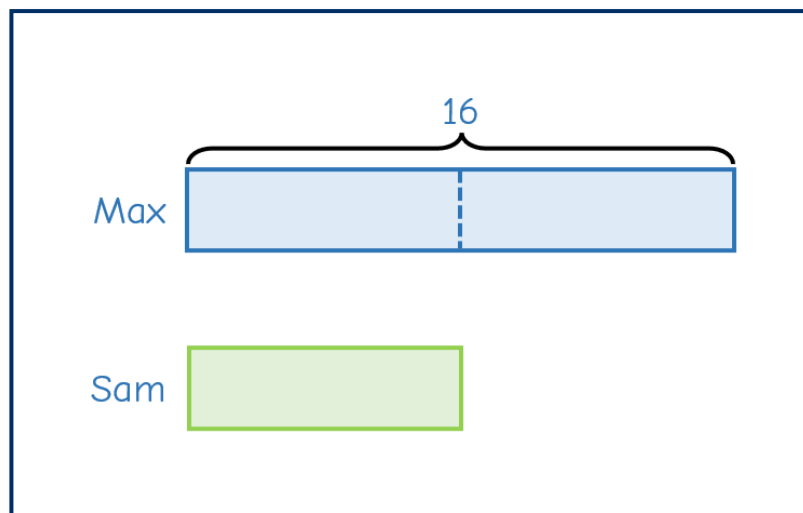
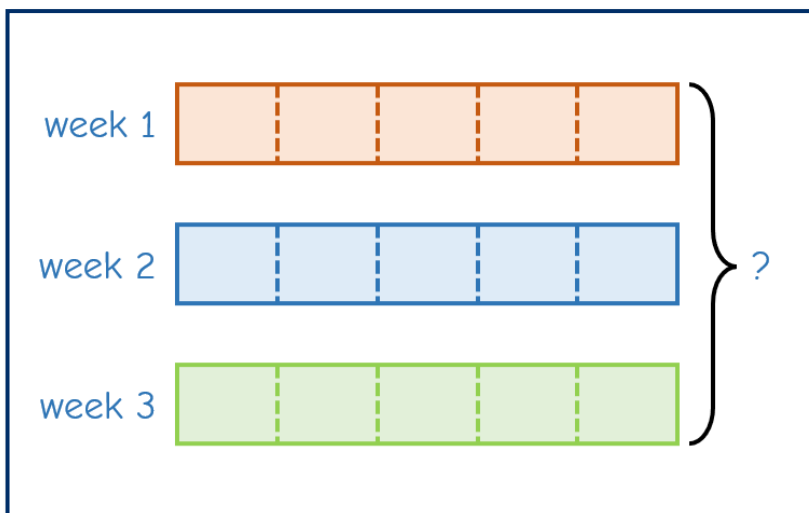
How many mince pies does she eat in 3 weeks?

- 2** Max makes 16 snowballs.

Sam makes half the number of snowballs that Max makes.



How many snowballs do they make in total?



- 3** Tommy spends £55 on a present and a gift box.

The present cost 4 times as much as the gift box.




How much does the present cost?

present




gift box



- 4** A carton of milk and a cookie cost £2.50

Three cartons of milk and four cookies cost £8.90



How much does a carton of milk cost?

milk and cookie



£2.50



£8.90

5

Amir, Ron and Kim each have some stickers.

- Amir has 25% more than Ron.
- Kim has $\frac{2}{5}$ the number of stickers Amir has.
- Kim gives away $\frac{3}{8}$ of her stickers and has 45 left.

How many stickers did they have in total at the start?

The Daily Challenge

