

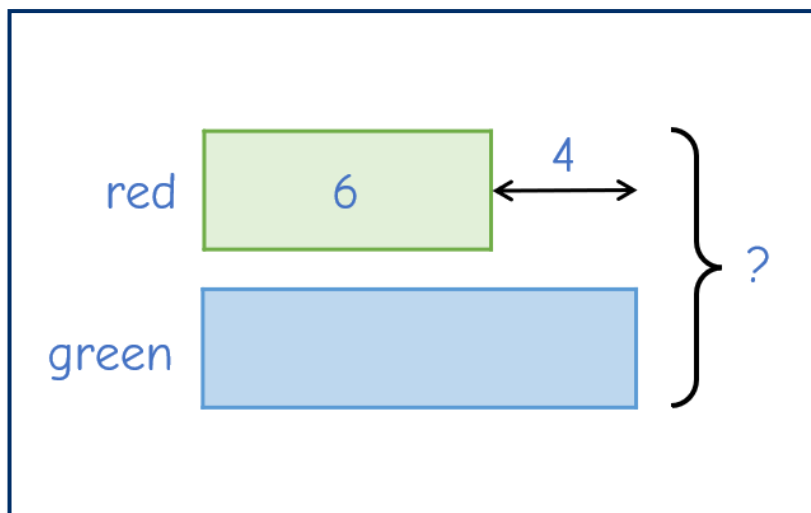
**1** Jo has some red socks and some green socks.

She has 6 red socks.




She has 4 more green socks than red socks.

How many socks does she have in total?

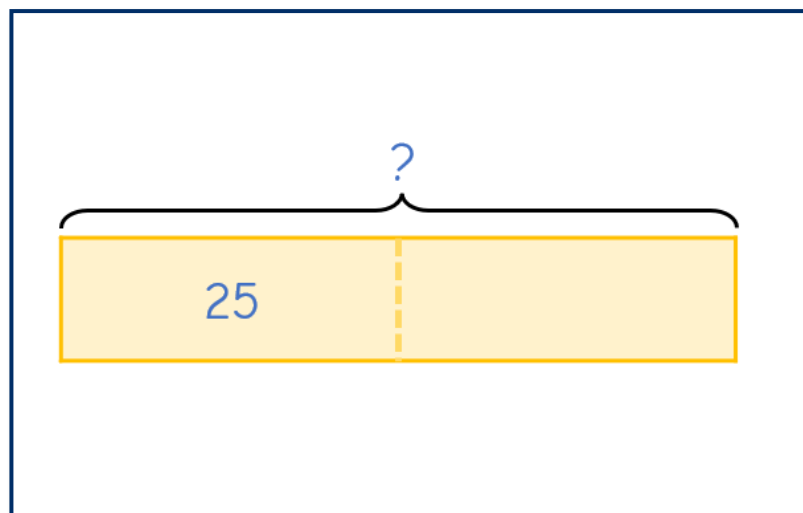


**2** Sam thinks of a number.



Half of my number is  
25

What is Sam's number?

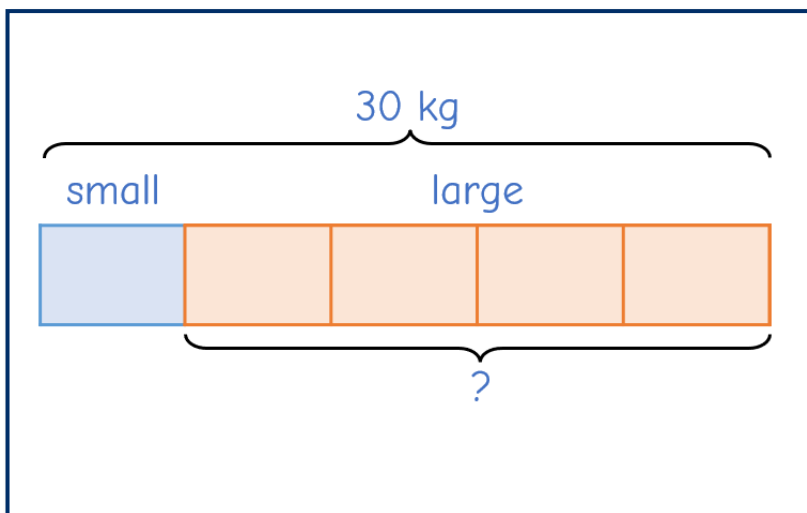


- 3** A large gift box weighs four times as much as a small gift box.



One large gift box and one small gift box together weigh 30 kg.

How much does one large gift box weigh?



- 4** Ron, Whitney and Mo sell biscuits.

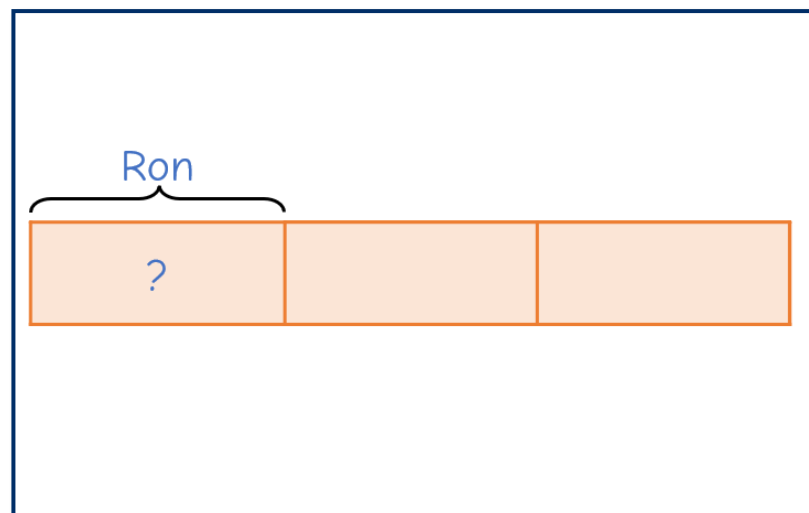
Ron sells  $\frac{1}{3}$  of the biscuits.

Whitney sells 40% of the remaining biscuits.

Whitney sells 24 biscuits.



How many biscuits did Ron sell?



**5** Alex and Dexter have £86 in total.

They each spend £7

Alex now has 25% more than Dexter.

How much more money did Alex have than Dexter at the start?

## The Daily Challenge