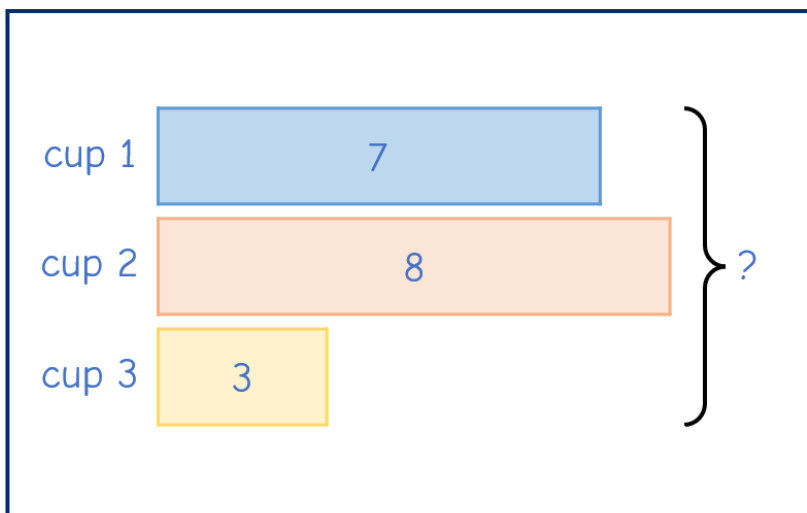


1 There are 3 cups of hot chocolate.

- The first cup has 7 marshmallows.
- The second cup has 8 marshmallows.
- The third cup has 3 marshmallows.

How many marshmallows are there in total?



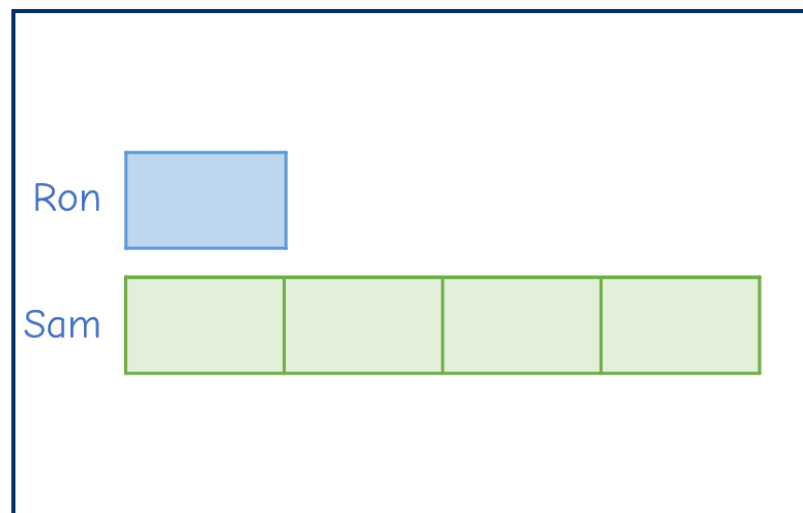
2 Ron and Sam have some buttons.

Sam has four times as many buttons as Ron.

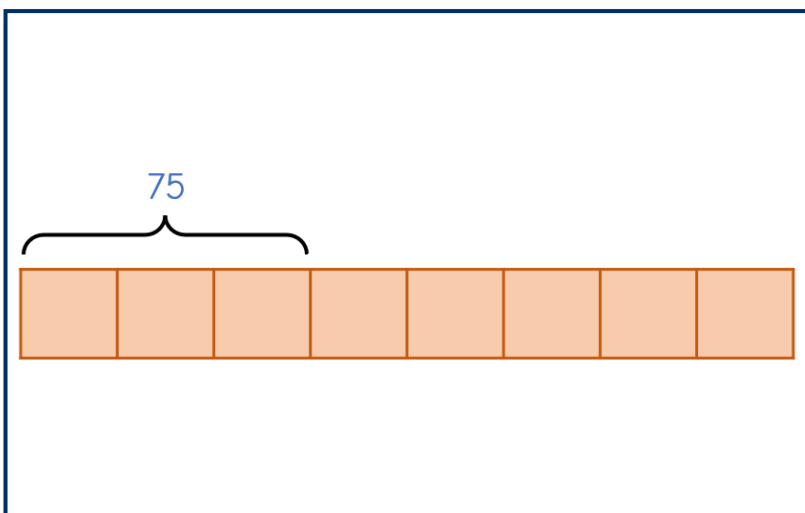
They have 30 buttons in total.



How many buttons does Sam have?

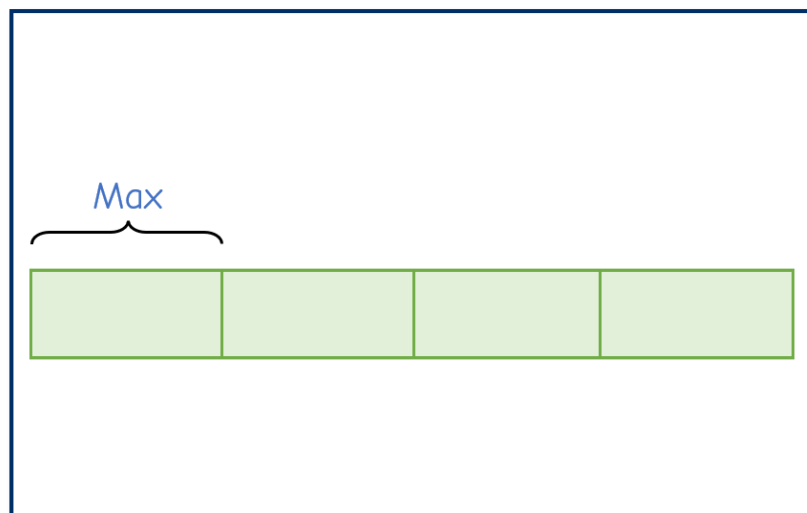


- 3** Kim has some decorations.
 $\frac{3}{8}$ of her decorations are gold.
 She has 75 gold decorations.
- How many decorations does Kim have in total?



- 4** Max, Whitney and Dora share some wrapping paper.
- Max uses $\frac{1}{4}$ of the wrapping paper.
 - Whitney uses 8 times as much as Dora.
 - Whitney uses 2.25 m more than Max.

How much wrapping paper does Max use?



5

Amir has two bags of sugar.

- He uses $\frac{1}{2}$ of the sugar in the first bag.
- He uses $\frac{1}{5}$ of the sugar in the second bag.
- There is now the same amount of sugar in each bag.
- At the start, there was 240 g more sugar in the first bag than the second bag.

How much sugar was in the first bag at the start?

The Daily Challenge