


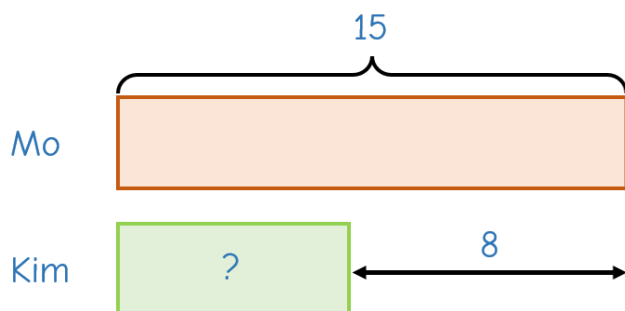
1

Mo has 15 sweets.



Mo has 8 more sweets than Kim.

How many sweets does Kim have?

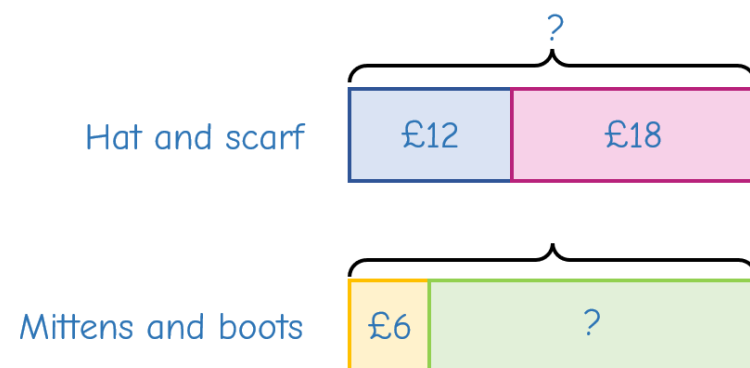


2



The total cost of the hat and the scarf is the same as the total cost of the mittens and the boots.

How much do the boots cost?



3

Kim and Dexter each build a snowman.


Kim's snowman is 3 times taller than Dexter's snowman.

Dexter's snowman is 94 cm shorter than Kim's snowman.




How tall is Kim's snowman?

Kim



Dexter



94 cm



4

Three stalls at a market are selling decorations.

Stall B has $\frac{2}{5}$ the number of decorations that Stall A has.

Stall B has double the number of decorations that Stall C has.

Stall A has 135 more decorations than Stall B.
How many decorations do the stalls have altogether?

Stall A



Stall B



Stall C



5

A factory makes gold baubles, silver baubles and red baubles.

- $\frac{8}{11}$ of the baubles the factory makes are gold.
- $\frac{2}{9}$ of the remaining baubles are silver.

The factory makes 3,250 gold and silver baubles.

How many red baubles does the factory make?

The Daily Challenge