

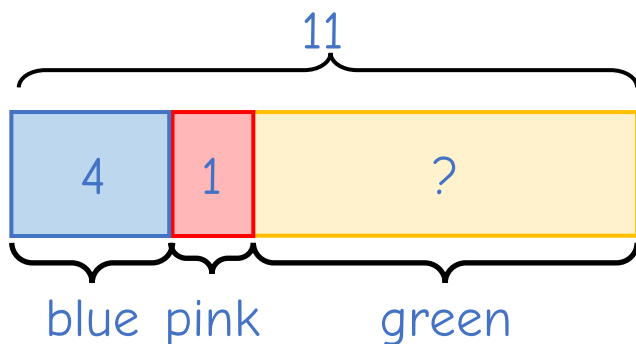
1

Mo has 11 sweets.

4 of the sweets are blue and 1 is pink.

The rest are green.

How many sweets are green?



2

Ron makes 10 snowballs.

Jack makes twice as many snowballs as Ron.



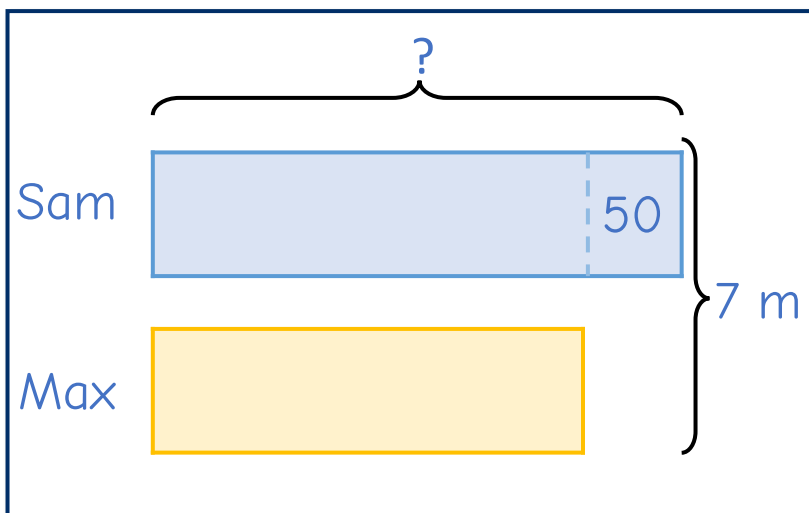
How many snowballs do Ron and Jack make altogether?



- 3** Max and Sam are making paper chains. Sam's chain is 50 cm longer than Max's chain.

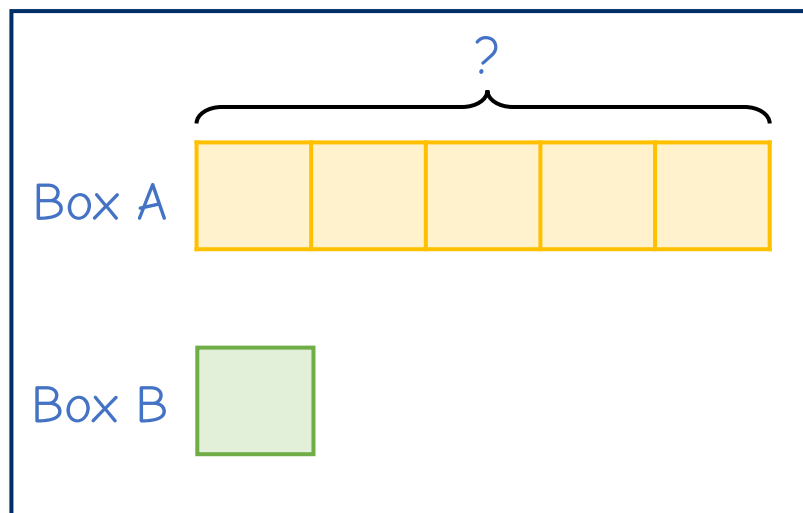
The total length of the paper chains is 7 metres.

How long is Sam's chain?



- 4** There are 5 times as many baubles in box A as box B.
- 28 baubles are moved from box A to box B.
- Both boxes now have the same number of baubles.

How many Baubles were in box A at the start?



5 Mr Rose has three parcels to post.

Parcel A and B together have a mass of 12 kg.

Parcel B and C together have a mass of 14 kg.

Parcel A and C together have a mass of 16 kg.

What is the mass of each parcel?

The Daily Challenge