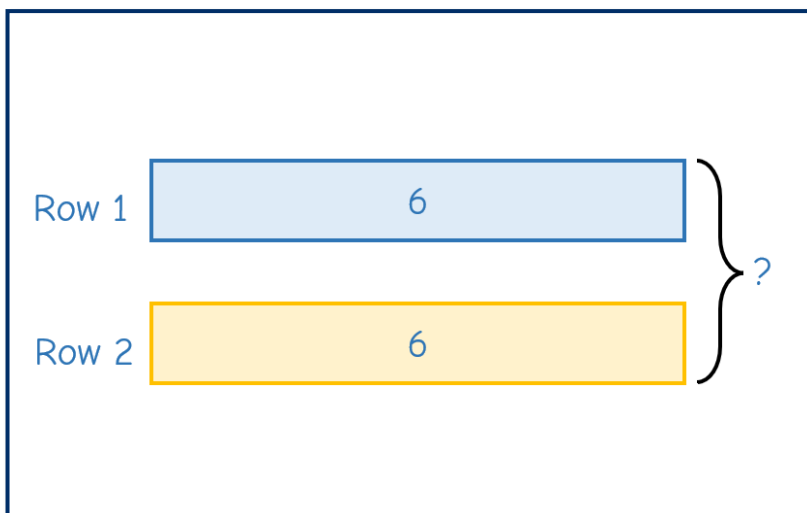


**1** Santa has some reindeer.

He arranges them into 2 rows to pull his sleigh.

Each row has 6 reindeer.

How many reindeers pull Santa's sleigh?



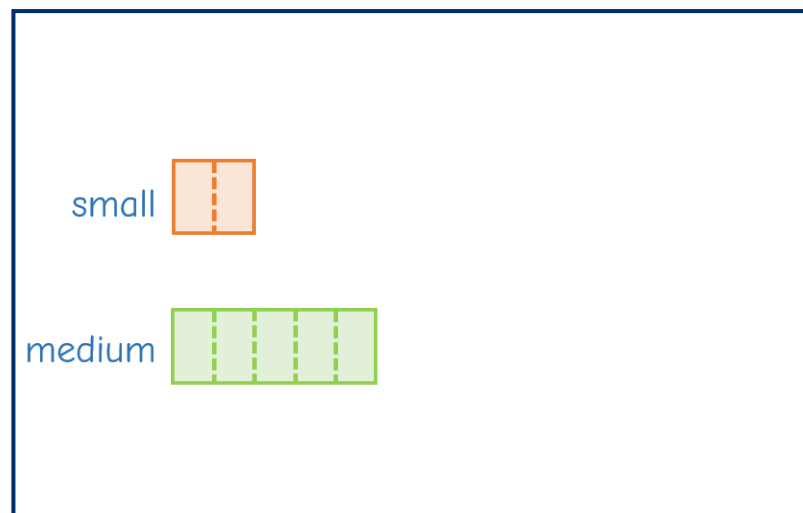
**2** A small bag of cookies contains 2 cookies.



A medium bag of cookies contains 5 cookies.

Jo buys 5 small bags and 3 medium bags of cookies for a party.

How many cookies does Jo buy?



3

Three elves make some presents.



- Elf A makes 60 presents.
- Elf B makes three times as many presents as Elf C.
- Together, they make 420 presents in total.

How many presents does Elf B make?

Elf A

60

Elf B


Elf C

4

Brett has 96 more Christmas cards than Rosie.

Brett sends  $\frac{7}{10}$  of his cards.

Rosie sends  $\frac{1}{4}$  of her cards.



They have the same number of cards left.

How many cards did each child have at the start?

Brett

Rosie

5

Alex uses fairy lights and icicle lights to decorate her house.

- The difference between the number of fairy lights and icicle lights is 84
- Half of the number of fairy lights is equal to 4 times the number of icicle lights.

What is the total number of lights used for decorating Alex's house?

## The Daily Challenge